



THIRD SPACE
LEARNING

Fluent in Five Questions and Answers

Year 1

Week 7

Year 1 - Week 7

This week in a nutshell:

Welcome to the seventh week of Fluent in Five in Year 1.

This week, children will build on the work from the last two weeks, and will meet addition and subtraction bonds **within** 20 for the first time. Children will also continue to encounter skills from the previous weeks of Fluent in Five.

It is suggested that the following manipulatives are available for children to freely select from this week:-

- Number shapes
- Tens frames and counters
- 0-20 number lines
- Write on part-whole models
- Base 10



THIRD SPACE
LEARNING

Fluent in Five

Questions and Answers

Week 7

Day 1

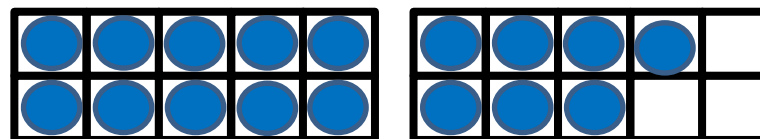


THIRD SPACE
LEARNING

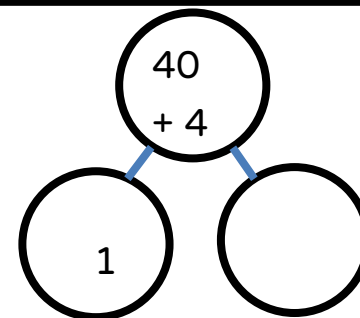
Year 1

Week 7 – Day 1

1. $17 + 2 = ?$



2. $44 - 1 = ?$



3. $10 + ? = 20$

Use...



Number shapes

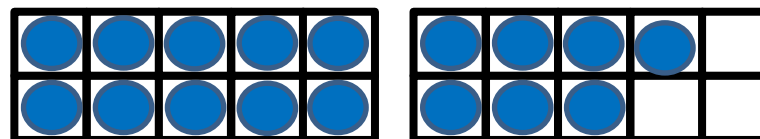
...to help you



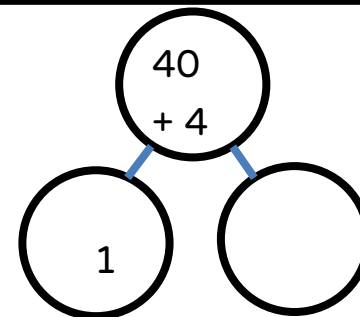
THIRD SPACE
LEARNING

Year 1
Week 7 – Day 1
(answers)

$$1. 17 + 2 = 19$$



$$2. 44 - 1 = 43$$



$$3. 10 + 10 = 20$$

Use...



Number shapes

...to help you



THIRD SPACE
LEARNING

Fluent in Five

Questions and Answers

Week 7

Day 2

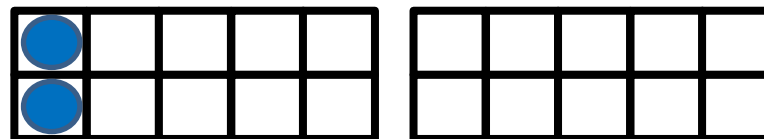


THIRD SPACE
LEARNING

Year 1

Week 7 – Day 2

1. $2 + ? = 20$



2. $13 + 6 = ?$


Use...



A number line

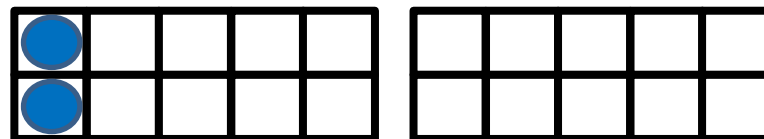
...to help you

3. Half of 2 = ?



Year 1
Week 7 – Day 2 (answers)

1. $2 + 18 = 20$



2. $13 + 6 = 19$

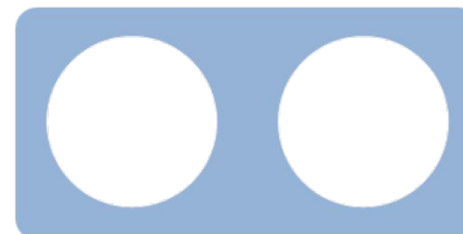
Use...



A number line

...to help you

3. Half of 2 = 1





THIRD SPACE
LEARNING

Fluent in Five

Questions and Answers

Week 7

Day 3

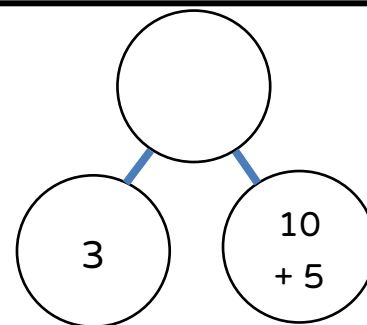


THIRD SPACE
LEARNING

Year 1

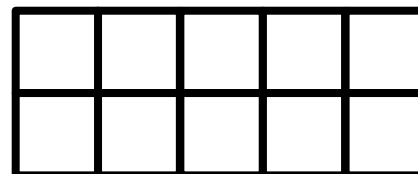
Week 7 – Day 3

1. $3 + 15 = ?$



2. $3 + ? = 20$

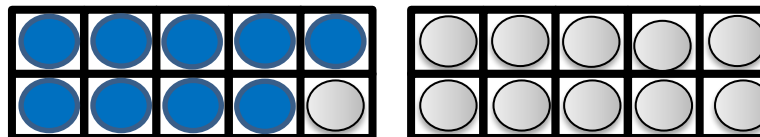
Use...



Tens Frames

...to help you

3. $20 - 11 = ?$

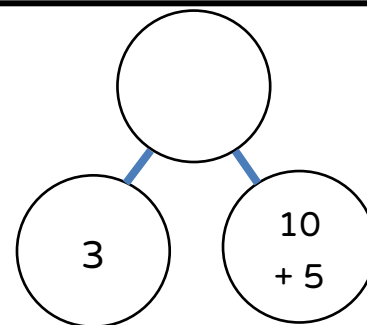




THIRD SPACE
LEARNING

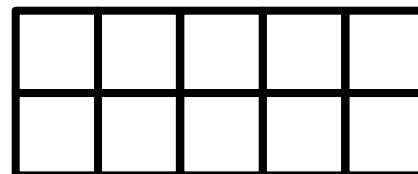
Year 1
Week 7 – Day 3
(answers)

$$1. 3 + 15 = 18$$



$$2. 3 + 17 = 20$$

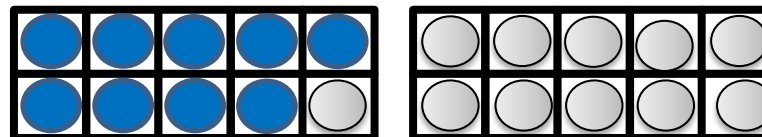
Use...



Tens Frames

...to help you

$$3. 20 - 11 = 9$$





THIRD SPACE
LEARNING


Fluent in Five

Questions and Answers

Week 7

Day 4

1. Double 5 = ?



2. $15 - 4 = ?$

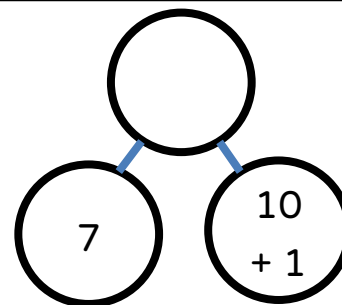
Use...



A number line

...to help you

3. $7 + 11 = ?$






THIRD SPACE
LEARNING

Year 1

Week 7 – Day 4 (answers)

$$1. \text{ Double } 5 = 10$$



$$2. 15 - 4 = 11$$

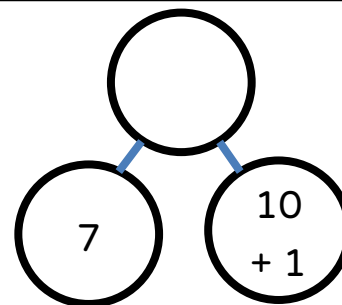
Use...



A number line

...to help you

$$3. 7 + 11 = 18$$





THIRD SPACE
LEARNING

Fluent in Five

Questions and Answers

Week 7

Day 5



THIRD SPACE
LEARNING

Year 1

Week 7 – Day 5

Use...

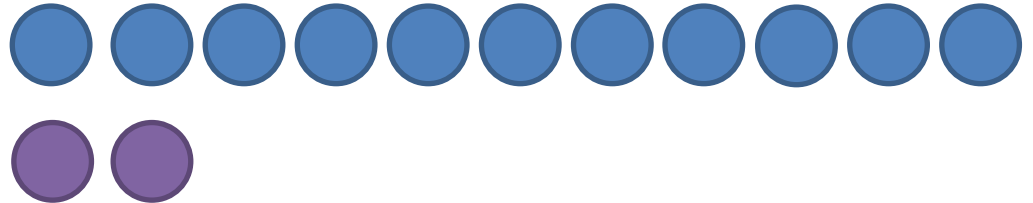


Number shapes


...to help you

$$1. 9 + 3 = ?$$

$$2. 11 - 2 = ?$$



$$3. 20 + 1 = ?$$





THIRD SPACE
LEARNING

Year 1

Week 7 – Day 5 (answers)

Use...




Number shapes


...to help you

$$1. 9 + 3 = 12$$

$$2. 11 - 2 = 9$$



$$3. 20 + 1 = 21$$




Do you have a group of pupils who need a boost in maths this term?

Each pupil could receive a personalised lesson every week from our specialist 1-to-1 maths tutors.

- Raise attainment
- Plug any gaps or misconceptions
- Boost confidence

Speak to us:

 thirdspacelearning.com

 0203 771 0095

 hello@thirdspacelearning.com