



**THIRD SPACE**  
LEARNING

# Fluent in Five

## Questions and Answers

Year 1

Week 27

## Year 1 - Week 27

### This week in a nutshell:

Welcome to the twenty-seventh week of Fluent in Five in Year 1.

As with last week questions will focus on children finding quarter and half of numbers, with children continue to be exposed to  $\frac{1}{2}$  and  $\frac{1}{4}$  written as fractions.

As with previous weeks, questions will also continue to recap content that has been covered so far in Year 1.

It is suggested that the following manipulatives are available for children to freely select from this week:-

- Number shapes
- Tens frames and counters
- 0-50 number lines
- Write on part-whole models
- Base 10



**THIRD SPACE**  
LEARNING

# Fluent in Five

## Questions and Answers

Week 27

Day 1



THIRD SPACE  
LEARNING

Year 1  
Week 27 – Day 1


A.  $\frac{1}{4}$  of 20 = ?

You choose...

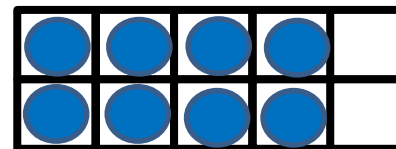
...what to use...

...to help you

B. 8 lots of 2 = ?



C.  $8 - 6 = ?$




A.  $\frac{1}{4}$  of 20 = 5

You choose...

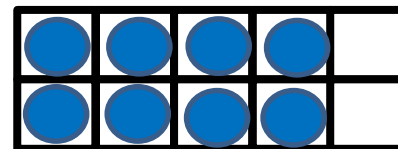
...what to use...

...to help you

B. 8 lots of 2 = 16



C.  $8 - 6 = 2$





**THIRD SPACE**  
LEARNING

# Fluent in Five

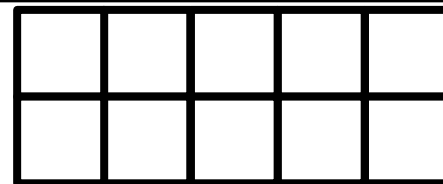
## Questions and Answers

Week 27

Day 2

A.  $18 + 2 = ?$


Use...




Tens Frames

...to help you

B.  $\frac{1}{4}$  of 4 = ?



C. Double 3 = ?





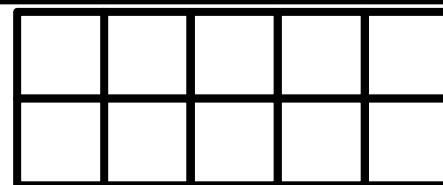
THIRD SPACE  
LEARNING

Year 1

Week 27 – Day 2 (Answers)

$$\text{A. } 18 + 2 = 20$$


Use...



Tens Frames

...to help you

$$\text{B. } \frac{1}{4} \text{ of } 4 = 1$$



$$\text{C. Double } 3 = 6$$







**THIRD SPACE**  
LEARNING

# Fluent in Five

## Questions and Answers

Week 27

Day 3

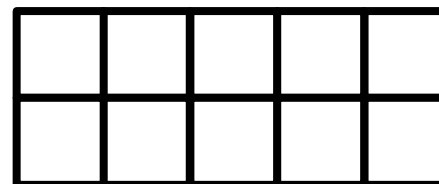


THIRD SPACE  
LEARNING

Year 1  
Week 27 – Day 3

A.  $\frac{1}{2}$  of 10 = ?


Use...



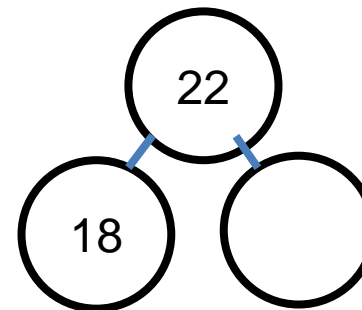
Tens Frames

...to help you

B. 6 shared between 2 = ?



C.  $18 + ? = 22$





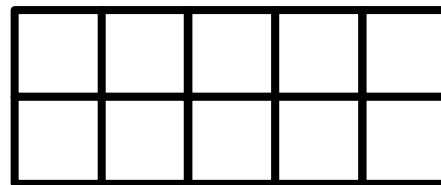
THIRD SPACE  
LEARNING

Year 1

Week 27 – Day 3 (Answers)

A.  $\frac{1}{2}$  of 10 = 5


Use...



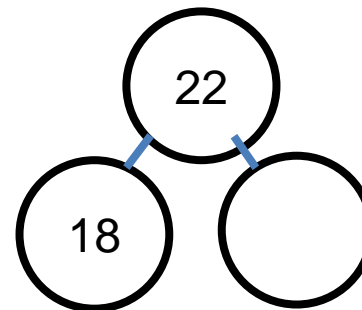
Tens Frames

...to help you

B. 6 shared between 2 = 3



C.  $18 + 4 = 22$





**THIRD SPACE**  
LEARNING

# Fluent in Five

## Questions and Answers

Week 27

Day 4



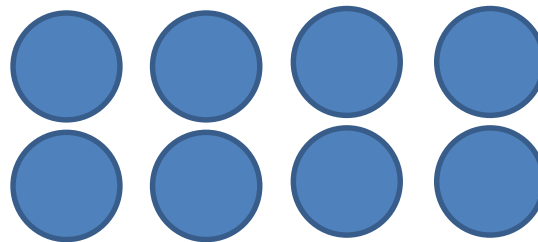
**A.  $\frac{1}{4}$  of 40 = ?**

You choose...

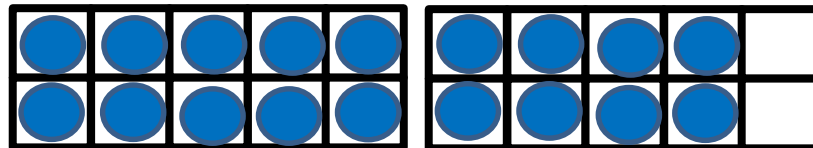
...what to use...

...to help you

**B. Half of 8 = ?**



**C.  $18 - ? = 10$**





THIRD SPACE  
LEARNING

Year 1

Week 27 – Day 4 (Answers)

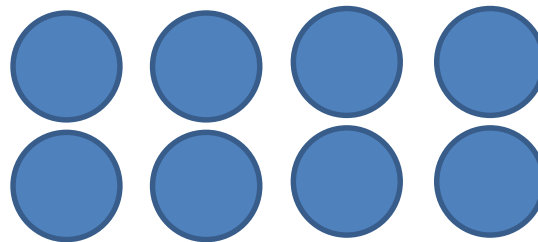
$$\text{A. } \frac{1}{4} \text{ of } 40 = 10$$

You choose...

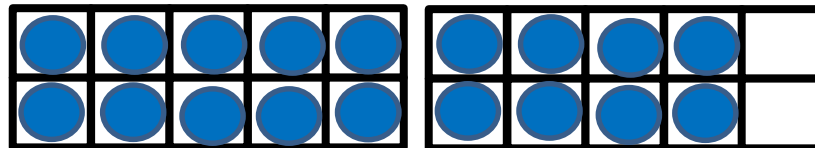
...what to use...

...to help you

$$\text{B. Half of } 8 = 4$$



$$\text{C. } 18 - 8 = 10$$





**THIRD SPACE**  
LEARNING

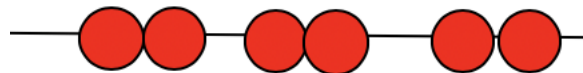
# Fluent in Five

## Questions and Answers

Week 27

Day 5

A. 3 lots of 2 = ?



B.  $\frac{1}{4}$  of 16 = ?

You choose...

...what to use...

...to help you

C.  $5 + 8 = ?$





A. 3 lots of 2 = 6



B.  $\frac{1}{4}$  of 16 = 4

You choose...

...what to use...

...to help you

C. 5 + 8 = 13

